




Holy Spirit School

Level 1

(For those who have completed Grade 1)

Summer Skills Workbook

Name _____



Holy Spirit School
Level 1
Skills Workbook

Parents,

Often times we find that students do not retain the skills they learned during the school year throughout the summer. This workbook is designed for students to complete over the summer. It is meant to review and reinforce the skills learned in the grade level just completed. The pages should take only a few minutes each. This will help to ensure retention of skills learned making the beginning of the next school year much easier for the students. Please note that completing the book all at one time defeats the purpose of the sustained practice over the summer.

You may find that your child will need you to read the directions but let your child record the answers. You may also find that a little extra review or instruction is needed.

Please have your child bring the completed workbook to school on the first day and give it to his/her homeroom teacher.

Thank you,
Holy Spirit School Faculty

Lesson #1

Write the sum.

$$6 + 7 =$$

What comes next?

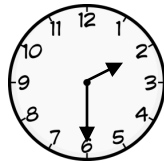
58, 59, _____, 61, _____

Count by 5's.

10, 15, _____, 25, 30, _____

I have 4 tens and 2 ones. What number am I?

What time is it?



Which is correct? Circle your answer.

$16 < 35$ or $24 > 50$

How much money is this?



Write the missing addend.

$$9 + \underline{\hspace{2cm}} = 16$$

Lesson #2

Add a period (.) or a question mark (?) at the end of each sentence.

Did you go to the store ____



I saw a bird in the tree ____

Circle the word that names the picture.

Kitten Kittens



Truck Trucks



Write the short vowel sound on the line to finish the word.

f __ sh



b __ t



c __ p



Write a word that rhymes with *star*.



Circle the correct word to finish the sentence.

I Me

_____ went to the store with my mother.

Lesson #3

Circle the numbers that are even.

22 5 10 17 6 25 30

Skip count the numbers below to find the missing numbers.

46, 48, 50, 52, _____, _____, _____

Use the numbers to write a fact family.

8 12 4

$$\begin{array}{r} 8 \\ + \underline{8} \end{array}$$

What is $10 - 6$?

Use $>$, $<$, or $=$



Draw a line through the heart to make 2 equal parts.



Lesson #4

Rewrite the sentence to include a capital letter and an ending mark.

the horse ran in the field




Rewrite each set of words to make a contraction.

do not

is not

we are

Circle the **long o** pictures.



Antonyms are words that mean the opposite. Write an antonym for each word.

hot _____

short _____

Lesson #5



Each vase has 5 flowers. How many flowers are in 7 vases?

Number of vases	1	2	3	4	5	6	7
Number of flowers	5	10					

Color the even numbers red. Color the odd numbers yellow.

21	22	23	24	25	26	27	28
31	32	33	34	35	36	37	38

$$\begin{array}{r} 10 \\ + 9 \\ \hline \end{array}$$

Draw and label money to show 2 ways to buy the truck.



75 cents

Find the sum.

$$9 + 2 =$$

Find the difference.

$$14 - 8 =$$

Lesson #6

The names of people are always capitalized. Rewrite the words that are a person's name using a capital letter.

bobby _____ tom _____ susan _____

The naming part of a sentence names who or what the sentence is telling about. Underline the naming part of the sentence below.

The children waited for the bus.



Circle the word to complete the sentence.

The _____ was so bright.

man moon mom



Synonyms are words that mean about the same thing. Write a synonym for each word.

big _____

glad _____

Circle the correct word to complete the sentence.

We _____ going to see the clowns at the circus.

is

are

Lesson #7

How many days are in one week?

Joe has 75 pennies. Nick has 1 less penny than Joe. How many pennies does Nick have?

Find the sum.

$$3 + 4 + 3 =$$

The short hand on a clock tells the minute or hour? Circle your answer.

Minute Hour

Write the missing numbers.

50, 60, _____, _____, 90

Write the word that comes next.

Seventh, eighth, _____

Use $>$, $<$, or $=$

56 ____ 33

Circle the car that is fourth in line.



Lesson #8

Use the words in the word bank below to create 3 compound words.

dog

flower

air

sun

port

house

The days of the week always begin with a capital letter. Write the days of the week below.

Use **He** or **She** to take the place of the underlined word or words.

My father drives a big truck. _____

The girl likes to jump rope. _____



Write a word that rhymes with *hat*.



Circle each word that has a **long i** sound.

bike

big

pick

mice

kiss

Lesson #9

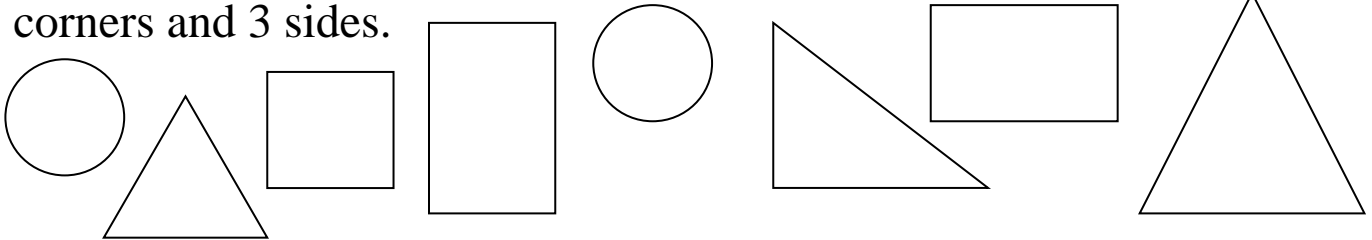
April						
S	M	T	W	T	F	S
						1
2	3	4	5	6	7	8
9	10	11	12	13	14	15
16	17	18	19	20	21	22
23	24	25	26	27	28	29
30						

How many Sundays are in this month? _____

Tammy went to a party on April 7. She went skating 5 days before that. When did she go skating?

Two weeks after April 10 is _____.

Use green to color the figures with 4 corners and 4 sides. Use blue to color the figures with curves. Use red to color the figures with 3 corners and 3 sides.



Complete the fact family.

$$4 + \underline{\quad} = 11$$

$$11 - 4 = \underline{\quad}$$

$$4 + 7 = \underline{\quad}$$

$$\underline{\quad} - \underline{\quad} = \underline{\quad}$$


How many minutes are in half hour?

Find the sum.

$$7 + 5 + 2 =$$

Lesson #10

Write 2 sentences about the picture you see.



1. _____

2. _____

Circle 2 nouns in each sentence.

The cat likes to drink milk.

My brother plays baseball.



Commas are used to separate the day of the month from the year.
Place a comma where it belongs in the date below.

July 7 2012

Put the correct ending mark for the sentence.

Where did you go for vacation

Lesson #11

How many days are in a week?

Find the pattern. Write the missing numbers.

2, 12, 22, _____, _____, _____

How many more people like berry yogurt than vanilla yogurt? _____

How many fewer like vanilla yogurt than banana yogurt? _____

Favorite Yogurt

Berry	8
Vanilla	2
Banana	6

Find the sum.

$$12 + 12 =$$

I have 3 apples in my bag. My friend gives me 4 more. How many apples do I have?

Find the difference.

$$16 - 7 =$$

2 children buy a bag of 8 cookies to share. How many cookies will each child get?



Lesson #12

The action word in a sentence is called a verb. Circle the verb in the sentence.

Paula rides a bus to school.

Make each word mean more than one. Rewrite the word.

glove _____

box _____

Underline the naming part in this sentence.

My mother has a new car.





Write an antonym for each word.

black _____

happy _____

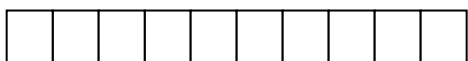
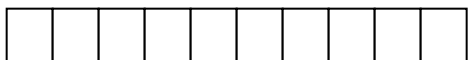
on _____

Circle the **short a** pictures.



Lesson #13

What number comes between 70 and 72?



_____ tens _____ ones

Arrange the numbers greatest to least. 73 65 68

$$\begin{array}{r} 16 \\ + 12 \\ \hline \end{array}$$

Use >, <, or =





How many chose the beach?

How many chose the pool?

Draw tally marks to show how many liked each place.

Places We Like		Total
Pool		8
Lake		2
Beach		5

A yo-yo costs 50cents. Draw two ways to buy the yo-yo. Draw pennies, nickels, dimes or quarters.



Lesson #14



Underline the sentence that tells about the picture.

The men are eating breakfast.

The men are camping.

The men are fishing.

Circle the word that means “almost the same” as the underlined word.

The small boy was playing on his slide.

big little short



Circle the word that comes first in alphabetical order.

apple

ape

basketball

art

Circle the word that means “the opposite of”.

synonym

antonym

Rewrite the sentence below with the correct capitalization and ending mark.

my brother and i went skating

Lesson #15


Fill in the missing numbers.

1			4		6	7			10
	12			15			18	19	
21		23			26			29	30
	32		34			37	38		
41		43		45		47		49	50

Find the pattern. Write the missing numbers.

41, 43, 45, _____, _____, _____

Draw lines to make four equal parts.

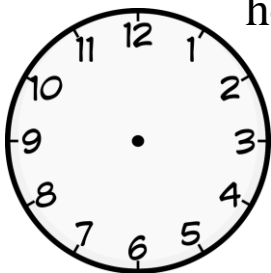


Order the numbers from least to greatest. 79 77 67

Find the sum.

$$7 + 2 + 5 =$$

Sue went to the circus with her family. It started at 1:30 and lasted 2 hours. Draw the hands on the clock to show the time the circus ended.



Lesson #16

Write the word for each picture using the blends *pl*, *fr*, *dr*, or *gr*.



Choose a word from the word bank to finish each sentence.

blue

blew

read

red

1. The sky was _____ today.
2. Please _____ this book to me.
3. She _____ her whistle at recess.
4. A stop sign is _____.

Titles for people are always capitalized. Rewrite the names to include capital letters.

dr. morris

mrs. Newman

mr. martin

Rewrite the words below to mean more than one.

paper _____

glass _____

zoo _____

desk _____

Lesson #17

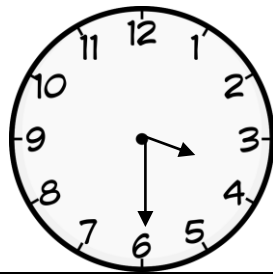
Tom is 8 years old. Julie is 7 years old. Carla is 4 years younger than Julie. How old is Carla?

Sam buys blocks for 75 cents. How many quarters does he need to buy the blocks?

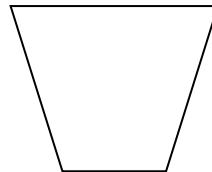
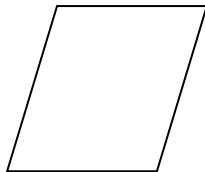
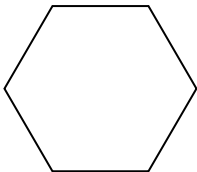
Find the sum.

$$17 + 20 =$$

What time is it?



Circle the shape that is a trapezoid. Color the hexagon blue.



How many minutes are in an hour?

Write the number.


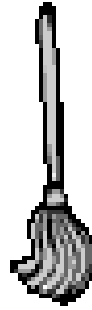

6 tens = _____ 8 tens = _____ 4 tens = _____

Find the difference.

$$10 - 7 =$$

Lesson #18

Circle the **short o** picture words.



Write two words that rhyme with *stop*.

- 1.
- 2.

Use **I** or **me** to complete the sentences.

_____ rode my bike at the park.

My sister gave her doll to _____.

The months of the year always begin with a capital letter. Write the name of 4 months below.

Put the correct ending mark at the end of each sentence.

Tammy likes to go roller skating ____

Who opened the jar of peanut butter ____

Lesson #19

Circle to show your answer.

There are 238 stamps in a collection. What is the value of the **8** in the number **238**? **800** **80** **8**

Write a number sentence for the story.

There are 8 seashells. 3 seashells washed away. How many seashells are there now?

My family will leave for vacation on December 25. In five days my family will leave. What day is it today?

S	M	T	W	T	F	S
1	2	3	4	5	6	7
15	16	17	18	19	20	21
22	23	24	25	26	27	28
29	30	31				

December

Find the pattern. Write the missing numbers.

30, _____, 50, 60, _____, _____, _____

Using the December calendar above color the third Wednesday red. Color the last Sunday purple. Color the second Saturday green

Find the missing addend.

$$12 + \underline{\hspace{2cm}} = 15$$

Order the numbers from greatest to least. 28 48 82

Lesson #20

Write the long vowel sound on the line to finish the word.



d__ce



r__se



c__ke

Underline the naming part in this sentence.

The duck was swimming in the pond.



Use the words in the word bank below to create 3 compound words.

ground

pop

base

play

corn

ball

Circle the correct word to finish the sentence.

was

were

The baby _____ playing in the sand.

Rewrite each set of words to make a contraction.

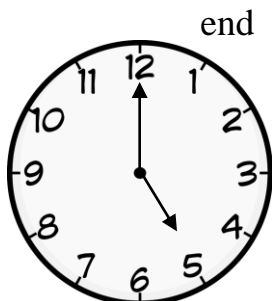
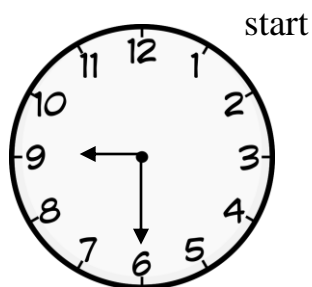
it is

did not

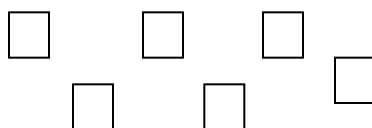
cannot

Lesson #21

How long did Sally spend at the beach?



--	--	--	--	--	--	--	--	--	--	--	--



_____ tens _____ ones

Lee saw 5 butterflies, 4 bees, 2 ladybugs, and 6 beetles. How many bugs did Lee see in all?

Find the pattern. Write the missing numbers.

40, _____, 30, _____, _____, 15, 10, _____

$$\begin{array}{r} 58 \\ - 20 \\ \hline \end{array}$$

79 is ten more than I am. 59 is ten less than I am. What number am I?

How many minutes are in one hour?

How many seconds are in a minute?

Lesson #22

Circle the action part of the sentence.

The dog barked at the bird.



Circle the describing word in the sentence.

The small child played with his ball.



An exclamation point is used at the end of a sentence to show excitement. Use either a question mark (?) or an exclamation point (!) at the end of each sentence.

We won the game _____

Did you win the game _____

Write today's date below. Be sure to include correct capitalization and punctuation.

Homophones are words that sound alike but spelled differently. Use the correct homophone below to fill in the blanks.

hear

here

My parents can _____ the music playing.

The books are _____ on the table.

Lesson # 23

1	2	3	4	5	6	7	8	9	10
11	12	13	14	15	16	17	18	19	20
21	22	23	24	25	26	27	28	29	30
31	32	33	34	35	36	37	38	39	40
41	42	43	44	45	46	47	48	49	50
51	52	53	54	55	56	57	58	59	60
61	62	63	64	65	66	67	68	69	70
71	72	73	74	75	76	77	78	79	80
81	82	83	84	85	86	87	88	89	90
91	92	93	94	95	96	97	98	99	100

Circle all of the even numbers.

Put an X on the numbers when you count by 5's.


Count by 3's and color the spaces yellow.

Count by 4's and color the spaces green.

Start at 51. Count 20 spaces. Put a  on the number.

Lesson #24

Circle each picture that has the /k/ ending sound.



Draw a line from the word to the picture whose name rhymes.

map



ham

ran



rat

Rewrite the sentence below to include correct punctuation and capitalization.

spaghetti is my favorite dinner

Put the correct ending mark at the end of each sentence.

Why was the team celebrating _____

They were excited about the game _____

We won _____

Lesson #25

Skip count the numbers below to find the missing numbers.

3, 6, 9, _____, _____

Draw and label money to show how to buy the toy.



35 cents

Use $<$, $>$, or $=$

32 _____ 41

Find the sum.

$$7 + 2 + 4 =$$

What number comes between 85 and 87?

Order the numbers from greatest to least. 34 41 38

Find the difference.

$$15 - 8 =$$

Find the missing addend.

$$16 + \underline{\quad} = 20$$
















Find the difference.

$$\begin{array}{r} 36 \\ - \underline{23} \end{array}$$


Use the numbers to write a fact family. 5 11 6

Lesson #26

Say the name of each picture. Print its beginning blend on the line.

 _____ ab	 _____ ain	 _____ uit
 _____ ee	 _____ ib	 _____ um
 _____ icks	 _____ ag	 _____ own
 _____ ed	 _____ ock	 _____ apes
 _____ oves	 _____ ock	 _____ ue

Lesson #27




$\begin{array}{r} 44 \\ + 5 \\ \hline \end{array}$	$\begin{array}{r} 35 \\ + 12 \\ \hline \end{array}$	$\begin{array}{r} 13 \\ + 46 \\ \hline \end{array}$
$\begin{array}{r} 59 \\ - 26 \\ \hline \end{array}$	$\begin{array}{r} 92 \\ - 31 \\ \hline \end{array}$	$\begin{array}{r} 38 \\ - 27 \\ \hline \end{array}$
$\begin{array}{r} 41 \\ + 2 \\ \hline \end{array}$	$\begin{array}{r} 47 \\ - 17 \\ \hline \end{array}$	$\begin{array}{r} 34 \\ - 20 \\ \hline \end{array}$
$\begin{array}{r} 34 \\ - 33 \\ \hline \end{array}$	$\begin{array}{r} 34 \\ + 33 \\ \hline \end{array}$	$\begin{array}{r} 92 \\ + 6 \\ \hline \end{array}$

Lesson #28

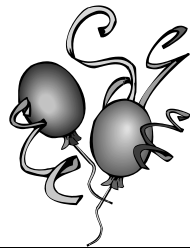


Write three sentences about the picture above. Be sure to use correct capitalization and punctuation.

Lesson #29



$12 + 5 =$	$8 + 8 =$	$14 + 2 =$	$6 + 9 =$
$1 + 9 =$	$9 + 9 =$	$10 + 3 =$	$5 + 8 =$
$7 + 9 =$	$6 + 4 =$	$11 + 4 =$	$10 + 4 =$
$8 + 7 =$	$3 + 7 =$	$9 + 4 =$	$6 + 7 =$
$6 + 6 =$	$13 + 4 =$	$17 + 0 =$	$1 + 11 =$
$8 + 4 =$	$7 + 7 =$	$5 + 7 =$	$9 + 5 =$



$11 - 6 =$	$9 - 5 =$	$16 - 9 =$	$14 - 8 =$
$10 - 8 =$	$14 - 7 =$	$12 - 3 =$	$15 - 7 =$
$12 - 7 =$	$8 - 5 =$	$9 - 8 =$	$13 - 6 =$
$19 - 10 =$	$17 - 8 =$	$10 - 3 =$	$18 - 1 =$
$13 - 4 =$	$7 - 2 =$	$11 - 4 =$	$9 - 3 =$
$17 - 9 =$	$13 - 8 =$	$14 - 9 =$	$16 - 8 =$

Lesson #30

Circle all the long a words.

at
ate
rake
page
rack
made
safe
tap
mad
tape
scrap
scrape
may
sail
sand
main
say

Circle all the long e words.

step
team
bed
bead
red
best
beast
mean
let
bean
less
stem
belt
least
bee
scene
seen

Circle all the long i words.

bit
ice
tip
bite
light
mitt
sit
might
time
lid
dim
dime
pile
pit
lip
sigh
mine