




# Holy Spirit School

## Level 2

(For those who have just completed Grade 2)  
Summer Math and Language Arts Workbook

Name

---



Holy Spirit School  
Level 2  
Math and Language Arts Workbook

Parents,

Often times we find that students do not retain the skills they learned during the school year throughout the summer. This workbook is designed for students to complete over the summer. It is meant to review and reinforce the skills learned in the grade level just completed. The pages should take only a few minutes each. This will help to ensure retention of skills learned making the beginning of the next school year much easier for the students. Please note that completing the book all at one time defeats the purpose of the sustained practice over the summer.

You may find that your child will need you to read the directions but let your child record the answers. You may also find that a little extra review or instruction is needed.

Please have your child bring the completed workbook to school on the first day and give it to his/her homeroom teacher.

Thank you,  
Holy Spirit School Faculty

## Lesson #1

Underline the correct sentence.

*I and Bobby played baseball.*

*Bobby and I played baseball.*



Fill in the correct end mark.

*The children made popcorn \_\_\_\_\_*

*Did you put butter on it \_\_\_\_\_*

*I love popcorn \_\_\_\_\_*



Write two words that rhyme with *tire*.

An adjective describes a noun or naming word. Circle the adjective that describes the underlined word.

*Marsha wore a blue coat.*



An antonym is a word that means “the opposite of”. Write an antonym for each word.

Up \_\_\_\_\_

Black \_\_\_\_\_

A proper noun names a specific person, place or thing. Underline the proper noun in the sentence.

*My brother Sam bought a pizza.*



## Lesson #2

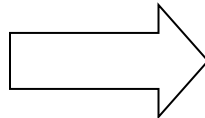
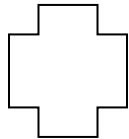
Megan flies 2,604 miles from Boston to Los Angeles to begin her vacation. She then flies the same distance to return home. What is the total distance that Megan flies?



Write the odd numbers between 22 and 40.

The answer to an addition problem is the \_\_\_\_\_.

Draw a line of symmetry for each shape.



What time was it 15 minutes ago if it is 12:30 now?

Use  $>$ ,  $<$ , or  $=$ .

9,318 \_\_\_\_\_ 9,813

How much money is there if you have 5 quarters and 3 nickels?

$1 \times 9 =$

$3 \times 2 =$

$2 \times 5 =$

$6 \times 3 =$

Circle the addends. Underline the sum.

$7 + 9 = 16$

### Lesson #3

Holidays always begin with a capital letter. Rewrite the holidays below using a capital letter.

*christmas*

*earth day*

*father's day*

Fill in the correct end mark.

*Have you seen my radio*\_\_\_\_\_



Add “es” to nouns that end in *s*, *x*, *z*, *ch* and *sh* to make them mean more than one. Make each noun mean more than one.

box - \_\_\_\_\_

watch - \_\_\_\_\_


Every sentence begins with a \_\_\_\_\_ letter.

A synonym is a word that means “almost the same”. Write a synonym for each word.

big \_\_\_\_\_

sad \_\_\_\_\_

Circle each picture that ends with the /n/ sound.



Underline the correct sentence.

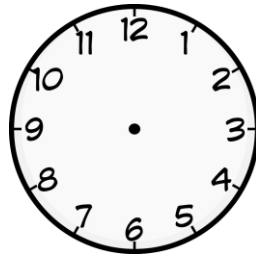
*Tony and me went to the park.*

*Tony and I went to the park.*

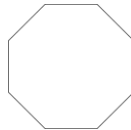
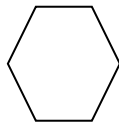
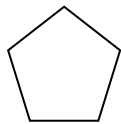


## Lesson #4

Draw the hands to show 3:25.



Color the pentagon green. Color the hexagon blue. Color the octagon yellow.



Draw what might come next in the pattern.



\_\_\_\_\_

Molly buys 4 baseball cards each week. In the 6<sup>th</sup> week, how many baseball cards does Molly have?



Week	1 <sup>st</sup>	2 <sup>nd</sup>	3 <sup>rd</sup>	4 <sup>th</sup>	5 <sup>th</sup>	6 <sup>th</sup>
Number of baseball cards						

Skip count. Write a rule for the pattern. Then extend the pattern.

Rule: Count by \_\_\_\_\_.

235, 245, 255, 265, 275, \_\_\_\_\_, \_\_\_\_\_, \_\_\_\_\_

If the baseball game began at 1:30 p.m. and it lasted for one hour, what time did the game end?

Use  $>$ ,  $<$ , or  $=$ .

69 \_\_\_\_\_ 68

## Lesson #5

Use the words below to fill in the blanks in the sentences.

*hear*

*here*

*knew*

*new*

My little sister has a \_\_\_\_\_ pair of shoes.

I put my books \_\_\_\_\_ on the table.

I could \_\_\_\_\_ the band playing.

Sally \_\_\_\_\_ the answers on the science test.

(Words that sound the same but are spelled differently are called homophones.)


Write two sentences about the picture. Be sure to use correct capitalization and punctuation.



Underline the correct sentence.

*My favorite day is Halloween.*

*Every thursday I stay after school.*



## Lesson #6

Write 4 addition sentences that each has a sum of 12.

Write 4 subtraction sentences that each has a difference of 4.

Circle the number in the tens place.

126

88

3,412

93

657

79

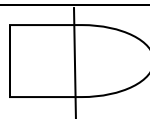
331

1,205

Jason has 3 fish bowls in his room. There are 5 fish in each bowl. How many fish does Jason have?




Does this figure show a line of symmetry?



What number comes just before 500?

What time is shown on the clock?





Lesson #7

Write the correct end mark after each sentence type.

Exclamation \_\_\_\_\_

Command \_\_\_\_\_

Question \_\_\_\_\_

Statement \_\_\_\_\_



A pronoun takes the place of a noun. Choose a pronoun to take the place of the underlined noun in the sentence.


He

They

She

My aunt and uncle moved to Florida. \_\_\_\_\_

Max rode his bicycle to the pool. \_\_\_\_\_



Write 3 words that rhyme with *blew*.

Add *s* or *es* to make each word mean more than one. Write the word on the line.

plane \_\_\_\_\_


shirt \_\_\_\_\_

bush \_\_\_\_\_


The months of the year are always capitalized. Write the name of the month in which you were born.

## Lesson #8

Jackie has 3 quarters and a penny in her pocket. She wants to buy a yo-yo for 95 cents. Does she have enough money? How do you know?



Draw the hands to show the time: 40 minutes after 8



Find the second Tuesday in April. Is April 12 more than or less than a week later? \_\_\_\_\_

What are the dates of the Saturdays that are before April 16? \_\_\_\_\_

How many Tuesdays are in April? \_\_\_\_\_

APRIL						
S	M	T	W	T	F	S
	1	2	3	4	5	6
7	8	9	10	11	12	13
14	15	16	17	18	19	20
28	29	30				

Follow the rule to complete the table.

Multiply by 2 and then add 1	
3	
4	
5	

How much money is this?



Order the numbers from greatest to least.     1,387     1,478     1,298

Lesson #9

Write the contraction for each set of words.

*will not*

*has not*

*I am*

Circle each word that has a long vowel sound.

*frog*

*pie*

*bean*

*red*

*hay*

*bone*

*seal*

*tan*

*bike*

*pack*

Use the words below to make 3 compound words.

*man*

*foot*

*fire*

*police*

*ball*

*fly*

Underline the proper noun.

*Margaret likes to bake cakes.*



Circle the adjective in the sentence.



*My little brother plays basketball.*

# Lesson #10

$4 + 4 + 4 =$

Show your work.

$72 + 98$

$98 - 72$



Mr. Mitchell has 2 boxes of pencils. There are 36 pencils in each box. Are there enough pencils for 59 children? How do you know?

Show two ways to make \$1.05.

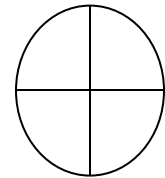
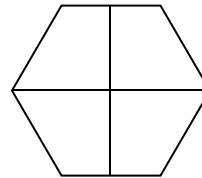
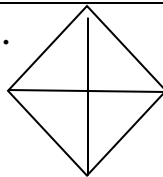


How many days are in a week?

Circle the number in the ones place. Underline the number in the hundreds place. Put an X on the number in the tens place.

829

Shade to make  $\frac{1}{4}$  for each figure.



## Lesson #11

Use the words below to finish the sentences.

*white shells feet teeth kite*


Mark found \_\_\_\_\_ on the beach.

The children flew a \_\_\_\_\_.

The boat had \_\_\_\_\_ sails.

Sophie brushed her \_\_\_\_\_ after eating.

After running, it feels good to rest my \_\_\_\_\_.



The naming part of a sentence tells who or what the sentence is about. It is called the subject. Circle the subject of the sentence.



*My family works in the yard.*

Rewrite the sentence with correct capitalization and punctuation.

*we saw three elephants at the zoo*



A(n) \_\_\_\_\_ is a word that means “the opposite of”.

synonym

antonym

## Lesson #12

Show your work. Use any of the strategies you learned this year.

$593 - 426$

$861 - 354$

$428 - 199$

$3 \times 3 =$

$4 \times 2 =$


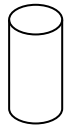
$5 \times 1 =$

$6 \times 0 =$

$2 \times 6 =$

The baseball game ended after one and a half hours. It ended at 3:00. What time did the game start?

Circle the rectangular prism. Put an X on the cylinder. Underline the cone.



Mark has 4 quarters, 2 dimes and 3 pennies. Does he have enough money to buy the book that costs \$1.15? How do you know?



Find the pattern and then fill in the blanks.

28, 38, 48, \_\_\_\_\_, \_\_\_\_\_, \_\_\_\_\_

Write 3 even numbers.

Lesson #13

A verb shows action. Underline the verb in the sentence.

*Mary skated down the hill.*



Use the words below to complete the sentences.

*knot not red read*

My dad \_\_\_\_\_ the newspaper when he got home from work.

I tied a \_\_\_\_\_ in my shoe.

The little boy had a \_\_\_\_\_ lollipop.

Mom said we could \_\_\_\_\_ go swimming today.



Write a synonym and an antonym for *large*.

Synonym \_\_\_\_\_ Antonym \_\_\_\_\_

Write a pronoun to take the place of the underlined noun in the sentence.

My friends and I were going to the ballgame. \_\_\_\_\_

Sarah went camping last week. \_\_\_\_\_



Fill in the correct end mark.

Watch out \_\_\_\_\_

## Lesson #14

There are \_\_\_\_\_ inches in a foot.

Ella has 26 grapes. She gives some to her brother. She has 18 grapes left. How many grapes did she give to her brother?



Tiles in a Bag	
Color	Number
Green	2
Red	7

The table shows the tiles in Lucy's bag. Which color is she more likely to pull?

Do you go to bed in the A.M or P.M.?

Use >, <, or =

$717 \text{ \_\_\_\_ } 711$

$1001 \text{ \_\_\_\_ } 1002$

$63 \text{ \_\_\_\_ } 65$


40 tens is the same as \_\_\_\_\_ hundreds.

Write a pattern showing skip counting by 3's.

\_\_\_\_\_, \_\_\_\_\_, \_\_\_\_\_, \_\_\_\_\_, \_\_\_\_\_

Draw a line through the information you do not need. Then solve.

*A ranger saw 63 giraffes on Monday. She saw 54 zebras and 72 giraffes on Friday. How many giraffes did she see on the two days?*





Lesson #15

Circle the word that is NOT spelled correctly.

*Yellow*

*Blue*

*Orange*

*Blak*

*Purple*



Write 3 sentences comparing these two cats. Use comparing words ending in *-er* or *-est*.



Add *s* or *es* to make each word mean more than one.

pig \_\_\_\_\_

church \_\_\_\_\_

toe \_\_\_\_\_

## Lesson #16

How much money is this?



$7 + 8 + 4 =$

$6 + 4 + 9 =$

40 ones is the same as \_\_\_\_\_ tens.

My number has 1 ten. It has more than 7 ones. It does not have 9 ones. What is my number?

Skip count by twos.

15, 17, 19, \_\_\_\_\_, \_\_\_\_\_, \_\_\_\_\_, \_\_\_\_\_

$10 + 20 = \underline{\hspace{2cm}}$

$40 + 30 = \underline{\hspace{2cm}}$

$50 + 20 = \underline{\hspace{2cm}}$

Write the time.

*45 minutes after 5*

How many months are in a year?

About how long will it take to write your name? Circle the better choice.

*More than a minute*

*Less than a minute*

## Lesson #17

A possessive noun tells you who owns something. It usually is shown with an apostrophe ('). Example: *My sister's dog is brown.* This sister shows that my sister owns a dog. Underline the possessive noun in each sentence.

*My cat's paws are black and white.*

*Mark's shoes are new.*



Circle the base word for each word.

*lately*

*jumped*

*unknown*

*cups*

*dislike*

Rewrite each word by dividing into syllables.

*rabbit*

*cycle*

When a short vowel word ends in a single consonant, usually double the consonant before adding **ing**. Rewrite the word and add **ing** to each base word.

drip

plan

beg

hop

Add the ending to each word inside the box. You may have to change the spelling of a word before adding the ending.

*s or es*

star \_\_\_\_\_

lunch \_\_\_\_\_

jump \_\_\_\_\_

fox \_\_\_\_\_

car \_\_\_\_\_

*ed*

stop \_\_\_\_\_

look \_\_\_\_\_

play \_\_\_\_\_

save \_\_\_\_\_

walk \_\_\_\_\_

## Lesson #18

Circle coins to make \$1.00.



Complete the table by using the tallies.

Favorite Drinks		
Drink	Tally	Total
Water		
Juice		
Milk		

Show your work.

$49 - 26 =$

$80 - 38 =$

$23 - 12 =$

$36 - 19 =$

Round each of the numbers to the nearest hundred.

96

112

348

315

498

365

What is the answer to an addition problem called? \_\_\_\_\_

## Lesson #19

Write three sentences about the picture. Be sure to use correct capitalization and punctuation.




60 = \_\_\_\_\_ tens    \_\_\_\_\_ ones

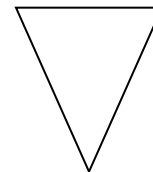
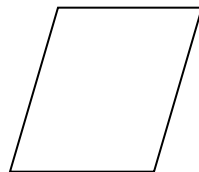
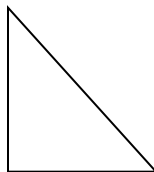
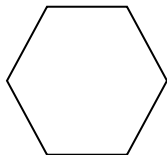
Each bike has 2 wheels. How many wheels would be on 10 bikes?



Show two ways to make 70 cents.


|

Circle each triangle.



Draw a pizza and show it in fourths.

Patrick buys 2 kites. Each kite costs \$2.15. He also buys some juice for \$1.20. How much does he spend in all?



$$7 + 7 + 7 =$$


3 groups of 5 = \_\_\_\_\_

Name 3 examples of words that need to be capitalized.

- 1.
- 2.
- 3.

Circle 2 nouns in each sentence.

*Tony caught five fish.*



*My aunt is going to the zoo.*

Not all nouns can be made plural by adding *s*. Rewrite each word to mean more than one.

child

mouse

animal

Write the word for each picture using the blends *pl*, *fr*, *dr*, or *gr*.



Circle the names that are written correctly.

Mrs. Davis

alan

Dr. jones



35 cents



43 cents



38 cents



22 cents

Lynn spent 57 cents. Which two items did she buy? Circle your answer.

Mitch and his family were on vacation for two weeks. How many days were they on vacation?

There are 6 baskets. There are 3 apples in each basket. Draw a picture and then write a number sentence.

If you have 8 dimes and 4 nickels, how much money do you have?

Write  $1,520$  in expanded form.

The answer to a multiplication problem is the \_\_\_\_\_.

Write a 3-digit number that is even.

Write a 3-digit number that is odd.




Put the correct ending mark at the end of each sentence.

We had a great vacation \_\_\_\_\_

Did you go to the beach \_\_\_\_\_

We saw dolphins swimming in the ocean \_\_\_\_\_

It was an amazing sight \_\_\_\_\_



Circle the naming part of the sentence. Underline the telling part of the sentence.



Sally and Natalie raced down the hill.

Use the correct word below to fill in the blanks.

are

is

1. She \_\_\_\_\_ a great dancer.
2. They \_\_\_\_\_ going to the movies.
3. We \_\_\_\_\_ visiting our grandparents.
4. He \_\_\_\_\_ wearing his new boots.



Important words in the names of holidays begin with a capital letter. Rewrite each holiday. Use capital letters where they are needed.

fourth of july \_\_\_\_\_

mother's day \_\_\_\_\_

thanksgiving \_\_\_\_\_

Use  $>$ ,  $<$ , or  $=$

$$8 + 9 \text{ \_\_\_\_\_\_ } 9 + 7$$

Jeremy had 26 toy cars. He gives Abby 7 toy cars. How many toy cars does Jeremy have now? Find the number sentence to solve. Circle your answer.



$7 + 19 = 26$

$26 - 7 = 19$

$26 - 19 = 7$

$26 - 7 = 16$

Natalie puts all of her dolls into 4 rows. She puts 3 dolls in each row. How many dolls does she have?



Write *814* using words.

Mark is 7 years older than Tom. Tom is 12. How old is Mark?

Which is another way to write 64? Circle your answer.

$60 + 8$

$64 + 4$

$60 + 4$

$68 + 2$

Which statement is true? Circle your answer.




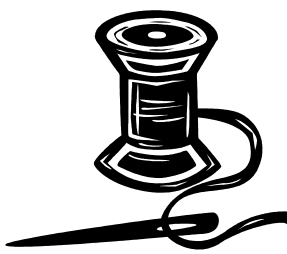



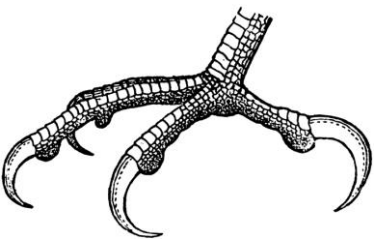

$209 > 210$

$210 < 209$

$209 = 210$


$210 > 209$

Say the name of each picture. Prints its vowel diagraph on the line. Use *oo*, *ea*, *au* or *aw*.

 <p>l ____ ndry</p>	 <p>p ____ l</p>	 <p>s ____</p>
 <p>thr ____ d</p>	 <p>str ____ s</p>	 <p>f ____ ther</p>
 <p>sp ____ n</p>	 <p>cl ____</p>	 <p>br ____ d</p>

Circle the correct word to finish each sentence.

1. What is the (feather, weather, leather) like today?
2. Will you need to wear a (sweater, weather, meadow)?
3. Maybe you will need a (ready, heavy, cleanser) coat.
4. Is it cold enough for (bread, thread, leather) boots?



$6 + 4 =$	$12 - 8 =$	$11 - 5 =$	$9 + 9 =$
$15 - 8 =$	$9 + 3 =$	$7 + 7 =$	$13 - 5 =$
$3 + 6 =$	$8 + 8 =$	$10 - 7 =$	$16 - 9 =$
$14 - 8 =$	$4 + 6 =$	$13 - 9 =$	$17 - 8 =$
$8 + 5 =$	$7 + 6 =$	$15 - 9 =$	$12 - 3 =$




$25 + 20 =$	$63 + 10 =$	$50 - 20 =$	$40 - 10 =$
$75 - 30 =$	$90 - 20 =$	$30 + 40 =$	$30 + 60 =$
$10 + 40 =$	$30 + 50 =$	$42 - 20 =$	$90 - 70 =$
$16 + 30 =$	$42 + 40 =$	$84 - 20 =$	$65 - 30 =$
$20 - 20 =$	$50 - 30 =$	$68 + 10 =$	$45 + 40 =$



$6 \times 1 =$	$2 \times 4 =$	$3 \times 3 =$
$2 \times 2 =$	$3 \times 1 =$	$4 \times 1 =$
$5 \times 2 =$	$2 \times 6 =$	$1 \times 5 =$

Lesson #27



Circle each statement that is a complete sentence.

My brother the sailor.

My brother wants to be a sailor.

Christmas is my favorite holiday.

My favorite holiday.

Write 5 words that begin with the letter *c* in alphabetical order.

Circle the adjective in each sentence.

The blue skies remind me of an ocean.

Nate has a red car.



Write a contraction for each set of words.

*has not*

*have not*

*had not*

Circle the base word for each word.

*peaceful*

*lucky*

*irregular*

## Lesson #28

Complete each table.

Subtract 9	
26	
30	
35	

Add 6	
15	
18	
19	

Subtract 5	
16	
18	
20	

Subtract 4 then add 2	
19	
26	
28	

Find the rule for each table.

5	17
7	19
9	21

4	11
15	22
20	27

3	9
11	17
15	21

Create your own table. Include the rule.

## Lesson #29

Write a synonym and antonym for *alike*.

Synonym \_\_\_\_\_

Antonym \_\_\_\_\_

Make each word mean more than one. Be careful with spelling.

berry

clam

orange

moose

Abbreviations for the months and days of the week are capitalized and end with a period. Draw a line to match the word to its abbreviation.

Tuesday

October

January

Monday

April

Thursday

Apr.

Mon.

Thurs.

Oct.

Jan.

Tues.



Rewrite the sentence using correct capitalization and punctuation.

*doesn't mr Jordan like cake*

Write 3 words that rhyme with *team*.





## Lesson #30

Show your work for each problem.

$413 - 210$

$398 - 199$

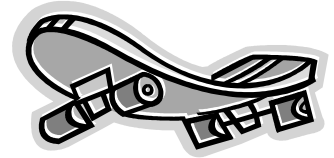
$732 - 466$

$805 - 571$

$414 - 126$

$677 - 144$

Each skateboard has 4 wheels. How many wheels will there be on 6 skateboards?



Sally is 5 years younger than her brother. Her brother is 17. How old is Sally?

Draw a line through the information you do not need. Then solve.

*Olivia put 20 marbles in a jar. She took 10 of them out. She put 4 jacks in a jar. How many marbles are left in the jar?*



Jackson had \$1.32. He bought a yo-yo for 50 cents. How much money does he have left?